

# Place Value to the Thousands

Name: \_\_\_\_\_

Date: Week of Oct. 1  
Due Thursday

## Part 1: Numerals in Standard Form

Write each number in standard form. The first problem has been completed for you.

1.  $3,000 + 200 + 30 + 5$

3,235

2.  $800 + 20 + 5$

3. 5 hundreds 2 tens 1 one

4. three thousand, four

5. 7 tens 7 ones

6.  $2,000 + 50 + 6$

7. two thousand, twenty-eight

8. 8 thousand 1 hundred

## Part 2: Finding the Value of a Digit

Write the value of the underlined digit. The first problem has been completed for you.

1. 9,640

9 thousands

2. 754

3. 675

4. 2,875

5. 8,100

6. 39

## One More Thing:

Which digit has the greatest value in the number **1,567**? Explain your answer in one to two sentences.

Hint: Use the phrase **place value** in your explanation.





Answer: \_\_\_\_\_

Explanation: \_\_\_\_\_



# Tomato Fest! Reading a Pictograph

Harvest season has begun, and the farmers are busily picking their tomatoes. The numbers of tomatoes are shown in the pictograph below. Note: each tomato in the pictograph stands for 5 tomatoes picked. Use the information provided to answer the questions.

Day	Picked Tomato
Day 1	
Day 2	
Day 3	
Day 4	

## Questions:

 = 5 tomatoes

1. How many tomatoes did the farmer pick on the first day?

Answer: \_\_\_\_\_

2. What day did the farmer pick the most tomatoes?

Answer: \_\_\_\_\_

3. Which days did the farmer pick the same amount of tomatoes? How many did he pick in total both of those days?

Answer: \_\_\_\_\_

4. What's the difference between the number of tomatoes picked on Day 3 and Day 4?

Answer: \_\_\_\_\_

5. How many tomatoes in total did he pick for this season?




Answer: \_\_\_\_\_




# Eggplant Recipe: Reading a Pictograph

You can cook a variety of dishes using eggplant. See how many of them the chef is planning for his restaurant. Answer the questions below.

Note: each eggplant in the pictograph stands for 3 eggplants.

Recipe	Number of Eggplants
Eggplant Parmesan	
Eggplant Lasagna	
Stuffed Eggplant	

 = 3 eggplants

## Questions:

1. How many eggplants did the chef use for Eggplant Parmesan?

Answer: \_\_\_\_\_

2. Which recipe used the least amount of eggplant?

Answer: \_\_\_\_\_

3. Which recipe used the most amount of eggplant? How many?


Answer: \_\_\_\_\_

4. What recipe used 15 eggplants?

Answer: \_\_\_\_\_




5. What is the difference between the number of eggplants in Eggplant Parmesan and in Eggplant Lasagna?


Answer: \_\_\_\_\_



# Carrots for Bunnies Reading a Pictograph

Your friends feed carrots to their pet bunnies. Find out how many carrots they gave to their pets and answer the questions below. Note: each carrot in the pictograph stands for 2 carrots fed.

Owner	Number of Carrots
Tony's	
Sammy's	
Lily's	

 = 2 carrots

## Questions:

1. How many carrots did Tony feed his bunny?

Answer: \_\_\_\_\_

2. How many carrots did Sammy feed her bunny?

Answer: \_\_\_\_\_

3. Who fed the most carrots?

Answer: \_\_\_\_\_

4. Who fed 12 carrots?

Answer: \_\_\_\_\_

5. Who fed more carrots, Tony or Lily?

Answer: \_\_\_\_\_

